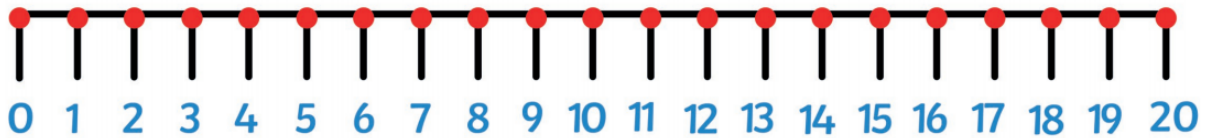


A farmer has 13 apples.

He picks 5 more.

How many apples does the farmer have now?

Show your calculation on the number line.



Write the number sentence to go with it.

$$\begin{array}{|c|} \hline \square \\ \hline \square \\ \hline \square \\ \hline \square \\ \hline \end{array} + \square = \square$$

Joe had 17 carrots in a basket.

He put 3 more in.

How many carrots are in his basket now?

Show your calculation on the number line.



Write the number sentence to go with it.

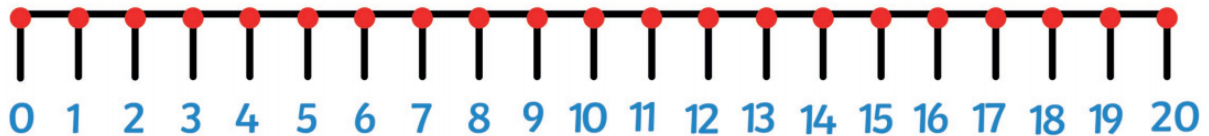
$$\begin{array}{|c|} \hline \square \\ \hline \square \\ \hline \square \\ \hline \square \\ \hline \end{array} + \square = \square$$

Sally had 12 beans on her plant.

She found 6 more.

How many beans are on the plant now?

Show your calculation on the number line.



Write the number sentence to go with it.

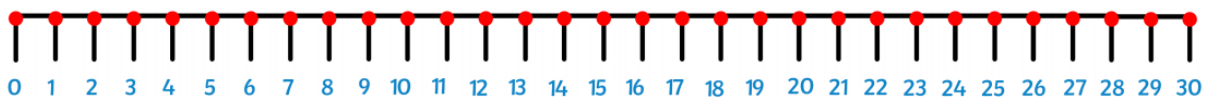
$$\begin{array}{|c|} \hline \square \\ \hline \square \\ \hline \square \\ \hline \square \\ \hline \end{array} + \square = \square$$

James had 21 lettuce seeds.

He collects 7 more.

How many lettuce seeds does he have now?

Show your calculation on the number line.



Write the number sentence to go with it.

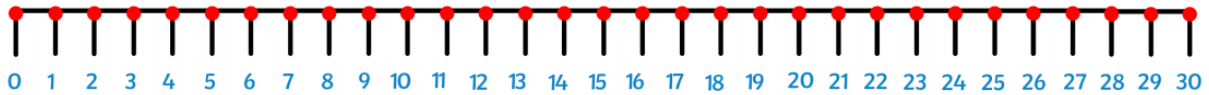
$$\square + \square = \square$$

Jess saw 17 flowers.

Tom saw 8 more.

How many flowers did they see altogether?

Show your calculation on the number line.



Write the number sentence to go with it.

$$\square + \square = \square$$