

Name: _____

Class: _____ Date: _____

1 Fill in the missing numbers.

1	2	3	4	5	6	7	8	9	10
11	12	13	14			17	18	19	20
	22	23	24	25	26	27	28		
31	32	33			36	37	38	39	

2 Write a number between
25 and 37.

25		37
----	--	----

3


a) $\begin{array}{|c|} \hline 20 \\ \hline \end{array} + \begin{array}{|c|} \hline \\ \hline \end{array} = \begin{array}{|c|c|} \hline 2 & 7 \\ \hline \end{array}$

b) Draw a label to show where 27 is on this bead string.

**4**



How many legs?

$$4 \times 2 = \square$$

**5**

How many eyes?


$$3 \times 5 = \square$$



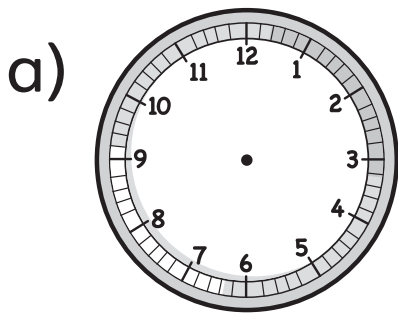
6 a) Double 7 is .

b) Double is 10.

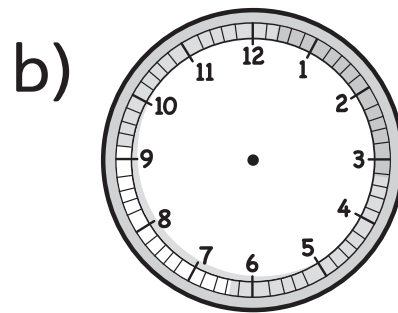
7 $\frac{1}{2}$ of 5 is .




8 Draw hands on the clocks to show the correct times.



4 o'clock



half past 10



9 a) Draw the next four shapes in this pattern.




b) Circle the names of the shapes in the pattern.

circle

square

triangle

rectangle



10 a) $6 + 3 = \square$

Now make up two of your own additions using this fact.

b)  +  = 

c)  +  = 



11

$$8 - 4 = \square$$

so $18 - 4 = \square$


$$28 - 4 = \square$$

and $48 - 4 = \square$

12

Find the change from 20p.

$$20\text{p} - 16\text{p} = \square \text{p}$$



13 Write these three numbers in order from smallest to largest.

38

17

83

14 a) $48 - 1 = \square$

b) $\square + 1 = 35$

15 Spider has been moving up and down this strip of numbers on the 1–100 square.

Fill in the missing numbers.



53

For teacher use

Your mark	_____ out of 15
What went well	
How to improve	